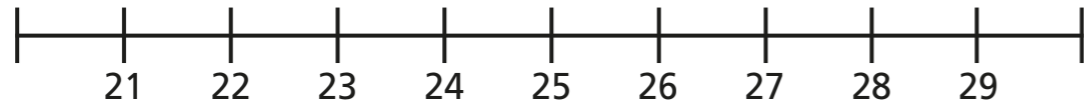


Round to the nearest 10

- 1 Which multiples of 10 do the numbers sit between?
Complete the number line.



- a) Circle the number 27

Which multiple of 10 is 27 closest to?

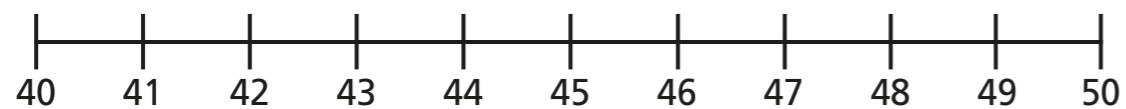
27 rounded to the nearest 10 is

- b) Circle the number 23

Which multiple of 10 is 23 closest to?

23 rounded to the nearest 10 is

- 2 Here is a number line.



Which numbers round down to 40?

Which numbers round up to 50?

- 3 Round each number to the nearest 10

a) 41

d) 79

g) 33

b) 19

e) 9

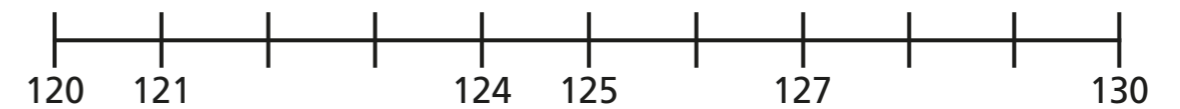
h) 71

c) 25

f) 4

i) 99

- 4



- a) Are these numbers closer to 120 or 130?

Use the number line to help you complete the sentences.

121 is closer to than

124 is closer to than

127 is closer to than

125 is the same distance from as it is from

- b) Round each number to the nearest 10

121

124

127


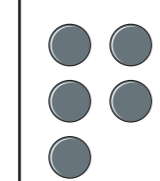
125

5 Round each number to the nearest 10

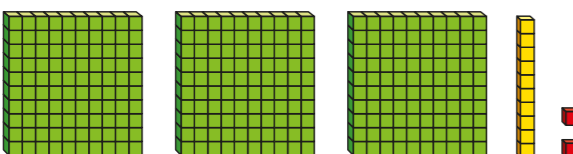
a) 

b) 712

c)

H	T	O
		

d) XXIX

e) 

f) CXVIII


6 Circle the numbers that round to 380 to the nearest 10

389 379 371 381 375 385

7 Circle the numbers that round to 200 to the nearest 10

150 207 196 193 209 195

8



To round to the nearest 10, I only need to look at the ones column.

Do you agree with Ron? Explain your answer.

9 There are 450 children in a school, to the nearest 10
How many children could there be in the school?

10 Two different 2-digit numbers round to 70 to the nearest 10
The sum of the two numbers is 136
What could the two numbers be?
